





Prénom :

date :

Complète les élytres des coccinelles pour qu'elles aient toutes 10 points:Complète les additions suivantes :

$1 + \dots = 10$

$4 + \dots = 10$

$8 + \dots = 10$

$8 + \dots = 10$

$7 + \dots = 10$

$7 + \dots = 10$

$6 + \dots = 10$

$2 + \dots = 10$

$2 + \dots = 10$

$5 + \dots = 10$

$0 + \dots = 10$

$5 + \dots = 10$

$7 + \dots = 10$

$6 + \dots = 10$

$1 + \dots = 10$

$0 + \dots = 10$

$9 + \dots = 10$

$4 + \dots = 10$

$4 + \dots = 10$

$3 + \dots = 10$

$0 + \dots = 10$

$9 + \dots = 10$

$10 + \dots = 10$

$9 + \dots = 10$

$2 + \dots = 10$

$1 + \dots = 10$





$3 + \dots = 10$

$10 + \dots = 10$

$5 + \dots = 10$

$6 + \dots = 10$

Complète les élytres des coccinelles pour qu'elles aient toutes 10 points:



Complète les additions suivantes :

$1 + 9 = 10$

$8 + 2 = 10$

$6 + 4 = 10$

$5 + 5 = 10$

$7 + 3 = 10$

$0 + 10 = 10$

$4 + 6 = 10$

$9 + 1 = 10$

$2 + 8 = 10$

$10 + 0 = 10$

$4 + 6 = 10$

$7 + 3 = 10$

$2 + 8 = 10$

$0 + 10 = 10$

$6 + 4 = 10$

$9 + 1 = 10$

$3 + 7 = 10$

$10 + 0 = 10$

$1 + 9 = 10$

$5 + 5 = 10$

$8 + 2 = 10$

$7 + 3 = 10$

$2 + 8 = 10$

$5 + 5 = 10$

$1 + 9 = 10$

$4 + 6 = 10$

$0 + 10 = 10$

$9 + 1 = 10$

$3 + 7 = 10$

$6 + 4 = 10$